



Score

Ejercicio 1


Ubique en el Pentagrama las siguientes notas musicales utilizando redondas

1  A five-line musical staff with a treble clef.


Do Fa Re Sol Mi La Fa Si Sol Do'

6  A five-line musical staff with a treble clef.


Do Mi Re Fa Mi Sol Fa La Sol Si

11  A five-line musical staff with a treble clef.

Re' Si Mi' Do' Fa' Re' Mi' Re' Do' Do

16  A five-line musical staff with a treble clef.

Fa' Do' Sol Re' La Re' Si Fa Do So.

21  A five-line musical staff with a treble clef.

Do' Do Mi Mi' Fa' Fa Re Re' Sol Sol'